

IIT-JAM-2005(PHYSICS)

IMPORTANT NOTE FOR CANDIDTES

- Attempt ALL 25 questions.
- Questions 1-15(objective questions) carry six marks each and questions 16-25(subjective questions) carry twenty one marks each.

Q.1 A solid sphere of mass m and radius a is rolling with a linear speed v on a flat surface without slipping. The magnitude of the angular momentum of the sphere on the surface is

- (a) $\frac{2}{5}mav$ (b) $\frac{7}{5}mav$ (c) mav (d) $\frac{3}{2}mav$

Q.2 The susceptibility of a diamagnetic material is

- (a) positive and proportional to temperature
(b) negative and inversely proportional to temperature
(c) negative and independent of temperature
(d) positive and inversely proportional to temperature

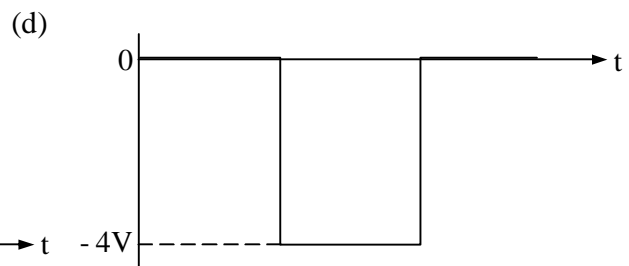
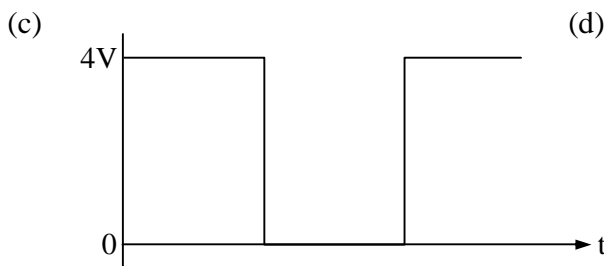
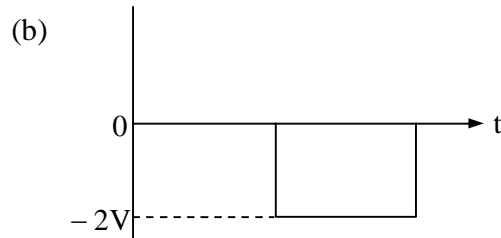
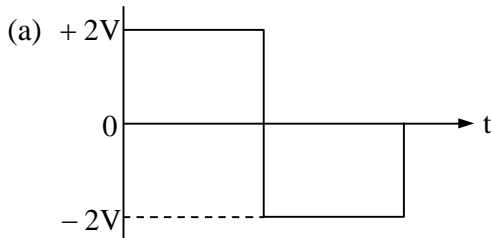
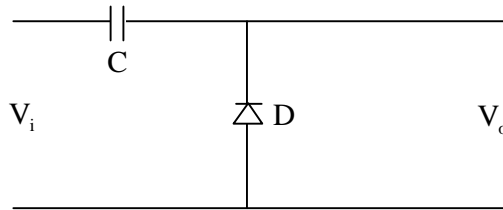
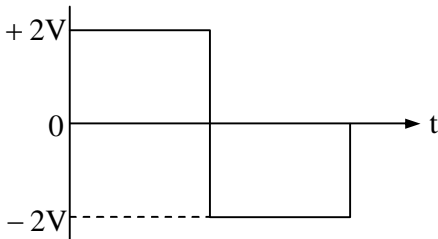
Q.3 The molar specific heat of a gas as given from the kinetic theory is $\frac{5}{2}R$. If it is not specified whether it is C_P or C_V , one could conclude that the molecules of the gas

- (a) are definitely monatomic (b) are definitely rigid diatomic
(c) are definitely non-rigid diatomic (d) can be monatomic or rigid diatomic

Q.4 The value of entropy at absolute zero of temperature would be

- (a) zero for all the materials
(b) finite for all the materials
(c) zero for some materials and non-zero for others
(d) unpredictable for any material

Q.5 A circuit and the signal applied at its input terminals (V_i) are shown in figure below. Which one of the options correctly describes the output waveform (V_o). (Assume all the devices used are ideal).



Q.6 Consider a beam of light of wavelength λ incident on a system of a polarizer and an analyzer. The analyzer is oriented at 45° to the polarizer. When an optical component is introduced between them, the output intensity becomes zero. (Light is incident normally on all components). The optical component is

- (a) a full-wave plate
- (b) a half-wave plate
- (c) a quarter-wave plate
- (d) an ordinary glass plate

Q.7 A small loop of wire of area $A = 0.01 \text{ m}^2$, $N = 40$ turns and resistance $R = 20 \Omega$ is initially kept in a uniform magnetic field B in such a way that the field is normal to the loop. When it is pulled out of the magnetic field, a total charge of $Q = 2 \times 10^{-5} \text{ C}$ flows through the coil. The magnetic of the field B is

- (a) $1 \times 10^{-3} \text{ T}$ (b) $4 \times 10^{-3} \text{ T}$
 (c) zero (d) unobtainable, as the data is insufficient

Q.8 If M_e, M_p and M_H and are the rest masses of electron, proton and hydrogen atom in the ground state (with energy -13.6 eV), respectively, which of the following is exactly true? (c is the speed of light in free space)

- (a) $M_H = M_p + M_e$ (b) $M_H = M_p + M_e - \frac{13.6 \text{ eV}}{c^2}$
 (c) $M_H = M_p + M_e + \frac{13.6 \text{ eV}}{c^2}$ (d) $M_H = M_p + M_e + K$, where $K \neq \pm \frac{13.6 \text{ eV}}{c^2}$ or zero

Q.9 An observer is sitting on a horizontal platform which is rotating with a constant angular velocity. He puts an object on the smooth frictionless floor of the platform, away from the axis of rotation, with zero initial velocity with respect to him. Let the time at this instant be $t = 0$. In the frame of the platform, the object would

- (a) remain at rest for all $t > 0$
 (b) accelerate purely in a radial direction outwards for all $t > 0$
 (c) accelerate purely in a tangential direction for all $t > 0$
 (d) accelerate radically in the outward direction at $t = 0$, however the direction of acceleration changes for $t > 0$

Q.10 Which of the following is **INCORRECT** for the matrix $M = \begin{pmatrix} 0 & 1 \\ 1 & 0 \end{pmatrix}$?

- (a) It is its own inverse
 (b) It is its own transpose
 (c) It is non-orthogonal
 (d) It has eigen values ± 1

Q.11 A combination of two thin convex lenses of equal focal lengths, is kept separated along the optic axes by a distance of 20 cm between them. The combination behaves as a lens system of infinite focal length. If an object is kept at 10 cm from the first lens, its image will be formed on the other side at a distance x from the second lens. The value of x is

- (a) 10 cm (b) 20 cm (c) 6.67 cm (d) infinite

Q.12 Two point charges $+q_1$ and $+q_2$ are fixed with a finite distance d between them. It is desired to put a third charge q_3 in between these two charges on the line joining them so that the charge q_3 is in equilibrium. This is

- (a) possible only if q_3 is positive
(b) possible only if q_3 is negative
(c) possible irrespective of the sign of q_3
(d) not possible at all

Q.13 A periodic function can be expressed in a Fourier series of the form,

$f(x) = \sum_{n=0}^{\infty} (a_n \cos(nx) + b_n \sin(nx))$. The functions $f_1(x) = \cos^2 x$ and $f_2(x) = \sin^2 x$ are

expanded in their respective Fourier series. If the coefficients for the first series are $a_n^{(1)}$ and $b_n^{(1)}$, and the coefficients for the second series are $a_n^{(2)}$ and $b_n^{(2)}$, respectively, then which of the following is correct?

- (a) $a_2^{(1)} = \frac{1}{2}$ and $b_2^{(2)} = \frac{-1}{2}$ (b) $b_2^{(1)} = \frac{1}{2}$ and $a_2^{(2)} = \frac{-1}{2}$
(c) $a_2^{(1)} = \frac{1}{2}$ and $a_2^{(2)} = \frac{-1}{2}$ (d) $b_2^{(1)} = \frac{1}{2}$ and $b_2^{(2)} = \frac{-1}{2}$

Q.14 Which of the following statements is correct for NaCl crystal structure?

- (a) It is simple cubic lattice with one atom basis
(b) It is a face-centered cubic lattice with one atom basis
(c) It is a simple cubic lattice with two atom basis
(d) It is a face-centered cubic lattice with two atom basis

Q.15 Which of the following statements is *INCORRECT* ?

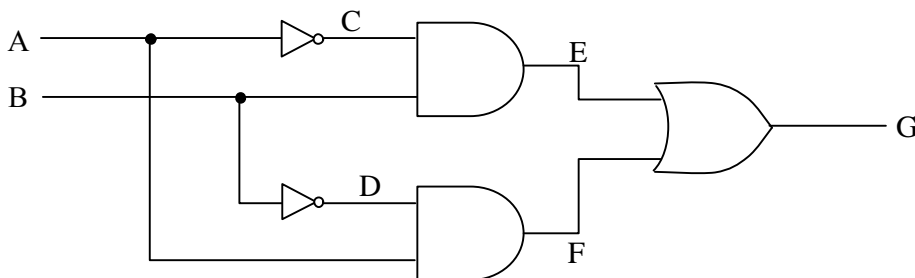
- (a) Indistinguishable particles obey Maxwell-Boltzmann statistics
- (b) All particles of an ideal Bose gas occupy a single energy state at $T = 0$
- (c) The integral spin particles obey Bose-Einstein statistics
- (d) Protons obey Fermi-Dirac statistics

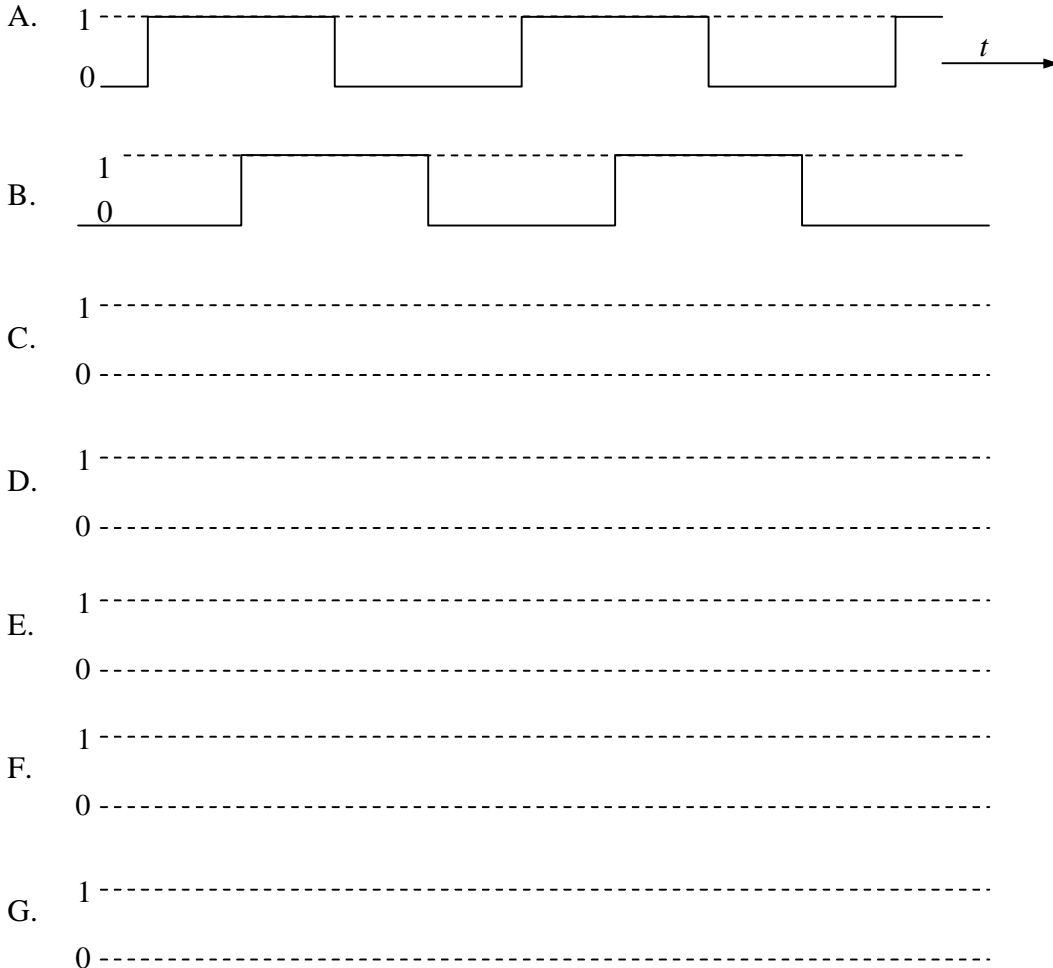
SUBJECTIVE QUESTIONS

Q.16 (a) Consider a constant vector field $\vec{v} = v_0 \hat{k}$. Find any one of the many possible vectors \vec{u} , for which $\vec{\nabla} \times \vec{u} = \vec{v}$.

(b) Using Stoke's theorem, evaluate the flux associated with the field \vec{v} through the curved hemispherical surface defined by $x^2 + y^2 + z^2 = r^2, z > 0$.

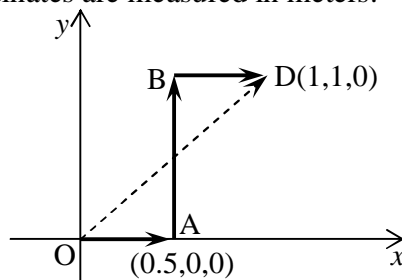
Q.17 A logic circuit and the time varying logic levels applied at it's A and B inputs are shown below. Sketch the corresponding output waveform at points C, D, E, F and G in the space given below the waveforms A and B.





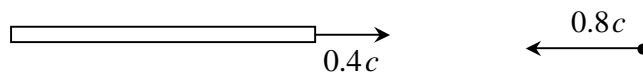
Q.18 (a) Determine whether the force represented by $\vec{F}(x, y) = k[(x^2 + y^2)\hat{i} + 2xy\hat{j}]$ is conservative or not. Here $k = 1\text{Nm}^{-2}$.

(b) Calculate the work done by this force in moving a particle from the origin O (0, 0, 0) to the point D(1, 1, 0) on the $z = 0$ plane along the paths OABD and OD as shown in the figure, where the coordinates are measured in meters.



Q.19 A rod is moving with a speed of $0.4c$ along its length in the positive x -direction, and a particle is moving along a negative x -directions with a speed $0.8c$ as shown in the figure below. Both the speeds are measured in an inertial frame S , and c is the velocity of light in free space. The length of the rod as measured in the S -frame is $3.6 m$.

(a) Find (i) the relative velocity of the rod (in terms of c) in the S -frame and in the rest frame of the rod, and (ii) time taken by the rod to cross the particle in the rest frame of the particle.



Q.20 A particle of mass m and energy E , moving in the positive x -direction, encounters a one-dimensional potential barriers at $x = 0$. The barriers is defined by

$$V = 0 \text{ for } x < 0$$

$$V = V_0 \text{ for } x \geq 0 \text{ (} V_0 \text{ is positive and } E > V_0 \text{)}$$

If the wave function of the particle in the region $x < 0$ is given as $Ae^{ikx} + Be^{ikx}$,

(a) Find the ratio $\frac{B}{A}$.

(b) If $\frac{B}{A} = 0.4$, find $\frac{E}{V_0}$, and the transmission and reflection coefficients.

Q.21 (a) Establish the equation $dU = \left(\frac{\partial U}{\partial T}\right)_V dT + \left[T\left(\frac{\partial P}{\partial T}\right)_V - P\right]dV$, given that

$$dU = TdS - PdV \text{ and } \left(\frac{\partial S}{\partial V}\right)_T = \left(\frac{\partial P}{\partial T}\right)_V \text{ where } U, P, T, V \text{ and } S \text{ are, respectively, the}$$

internal energy, pressure, temperature, volume and entropy of the system.

(b) If the specific heat is taken to be independent of T , utilize the above equation to derive an expression for $U(T, V)$ for one mole of van der Waals gas and then obtain the corresponding expression for an ideal gas.

Q.22 Solve the differential equation $xy \frac{dy}{dx} = 3y^2 + x^2$ with the initial condition $y = 2$

when $x = 1$.

Q.23 A beam of light is incident normally on a diffraction grating of width 2 cm. It is found that at 30° , the n^{th} order diffraction maximum for $\lambda_1 = 5000 \text{ \AA}$ is super-imposed on the $(n+1)^{\text{th}}$ order for $\lambda_2 = 4000 \text{ \AA}$. How many lines per cm does the grating have? Find out whether the first order spectrum from such a grating can be used to resolve the wavelengths $\lambda_3 = 5800 \text{ \AA}$ and $\lambda_4 = 5802 \text{ \AA}$?

Q.24 Consider two electromagnetic plane waves propagating in vacuum with their electric field vectors $\vec{E}_1 = E_0 \cos(kz - \omega t)\hat{i}$ and $\vec{E}_2 = E_0 \cos(kz + \omega t)\hat{i}$

- Evaluate the magnetic field vector corresponding to the superposition of these two waves.
- Calculate the time-averaged energy density as well as the time-averaged pointing vector for the resultant wave. (The time average is carried over one period of oscillation).

Q.25 A 150Ω resistor, a $10 \mu F$ capacitor and a $0.1 H$ inductor are connected in series to an a.c. source operating at an angular frequency ω .

- Find the value of ω for which the combination acts as a pure resistive load.
- The a.c. source is operated at a peak voltage of $300\sqrt{2} V$ and a frequency equal to half the resonance frequency of the circuit. Find the peak value of the current in the circuit and the phase difference between the current and voltage. Also, find the peak voltage across the inductor.