

## ELECTRONICS SOLUTIONS

### GATE-2010

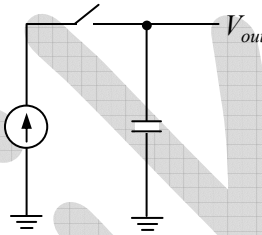
Q1. The voltage resolution of a 12-bit digital to analog converter (DAC), whose output varies from  $-10\text{ V}$  to  $+10\text{ V}$  is, approximately

- (a)  $1\text{ mV}$                       (b)  $5\text{ mV}$                       (c)  $20\text{ mV}$                       (d)  $100\text{ mV}$

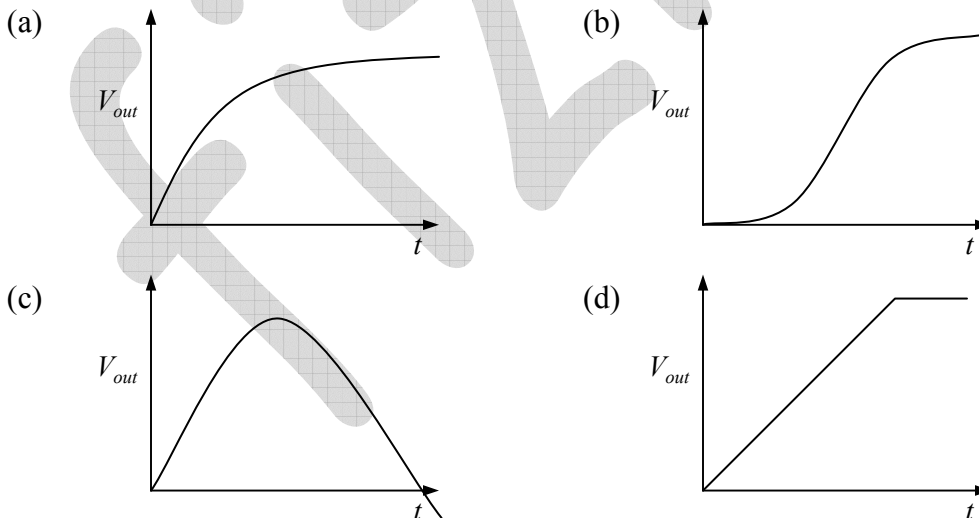
Ans: (b)

Solution: Voltage resolution =  $\frac{20\text{ V}}{2^{12} - 1} = 4.8\text{ mV}$

Q2. The figure shows a constant current source charging a capacitor that is initially uncharged.



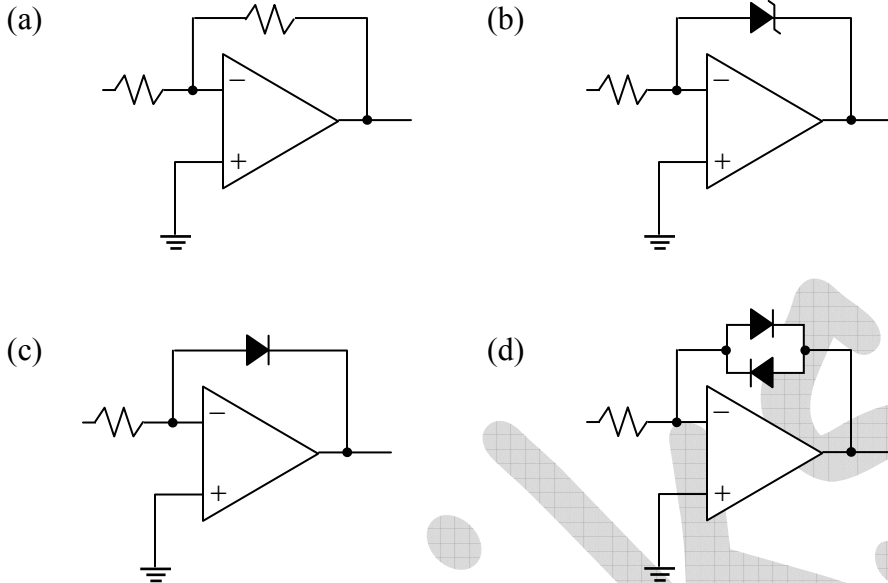
If the switch is closed at  $t = 0$ , which of the following plots depicts correctly the output voltage of the circuit as a function of time?



Ans: (d)

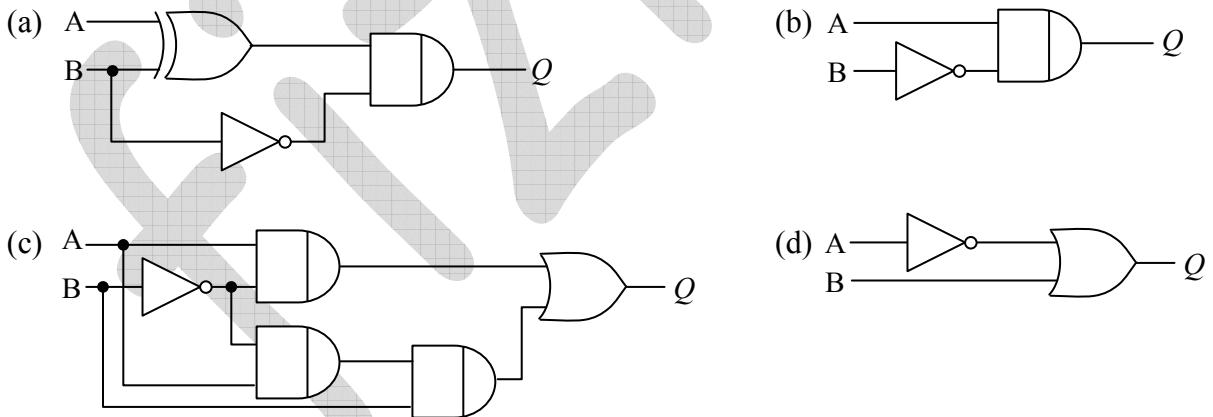
Solution:  $I_0 = \frac{CdV_0}{dt} \Rightarrow V_0 = \frac{I_0}{C}t$

Q3. In one of the following circuits, negative feedback does not operate for a negative input. Which one is it? The opamps are running from  $\pm 15$  V supplies.



Ans: (c)

Q4. For any set of inputs, A and B, the following circuits give the same output, Q, except one. Which one is it?



Ans. : (d)

**GATE-2011**

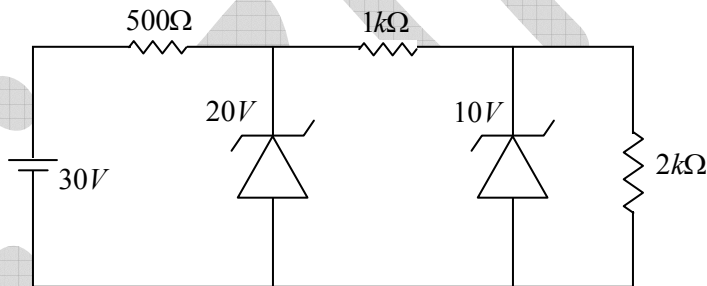
- Q5. Which of the following statements is **CORRECT** for a common emitter amplifier circuit?
- (a) The output is taken from the emitter
  - (b) There is  $180^\circ$  phase shift between input and output voltages
  - (c) There is no phase shift between input and output voltages
  - (d) Both  $p-n$  junctions are forward biased

Ans: (b)

- Q6. For an intrinsic semiconductor,  $m_e^*$  and  $m_h^*$  are respectively the effective masses of electrons and holes near the corresponding band edges. At a finite temperature the position of the Fermi level
- (a) depends on  $m_e^*$  but not on  $m_h^*$
  - (b) depends on  $m_h^*$  but not on  $m_e^*$
  - (c) depends on both  $m_e^*$  and  $m_h^*$
  - (d) depends neither on  $m_e^*$  nor on  $m_h^*$

Ans: (c)

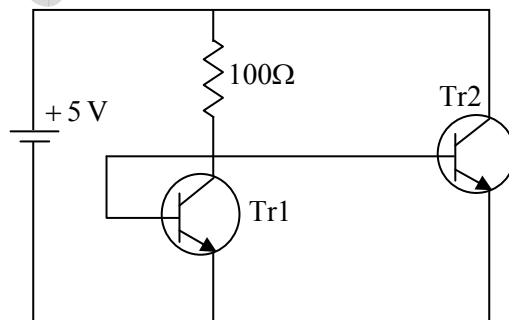
- Q7. In the following circuit, the voltage across and the current through the  $2\text{ k}\Omega$  resistance are



- (a) 20 V, 10 mA
- (b) 20 V, 5 mA
- (c) 10 V, 10 mA
- (d) 10 V, 5 mA

Ans: (d)

- Q8. In the following circuit, Tr1 and Tr2 are identical transistors having  $V_{BE} = 0.7\text{ V}$ . The current passing through the transistor Tr2 is



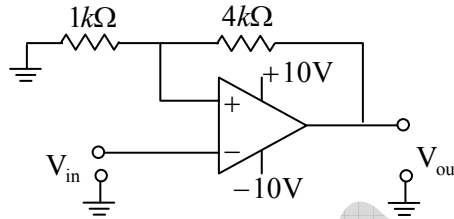
- (a) 57 mA
- (b) 50 mA
- (c) 48 mA
- (d) 43 mA

Ans: (d)

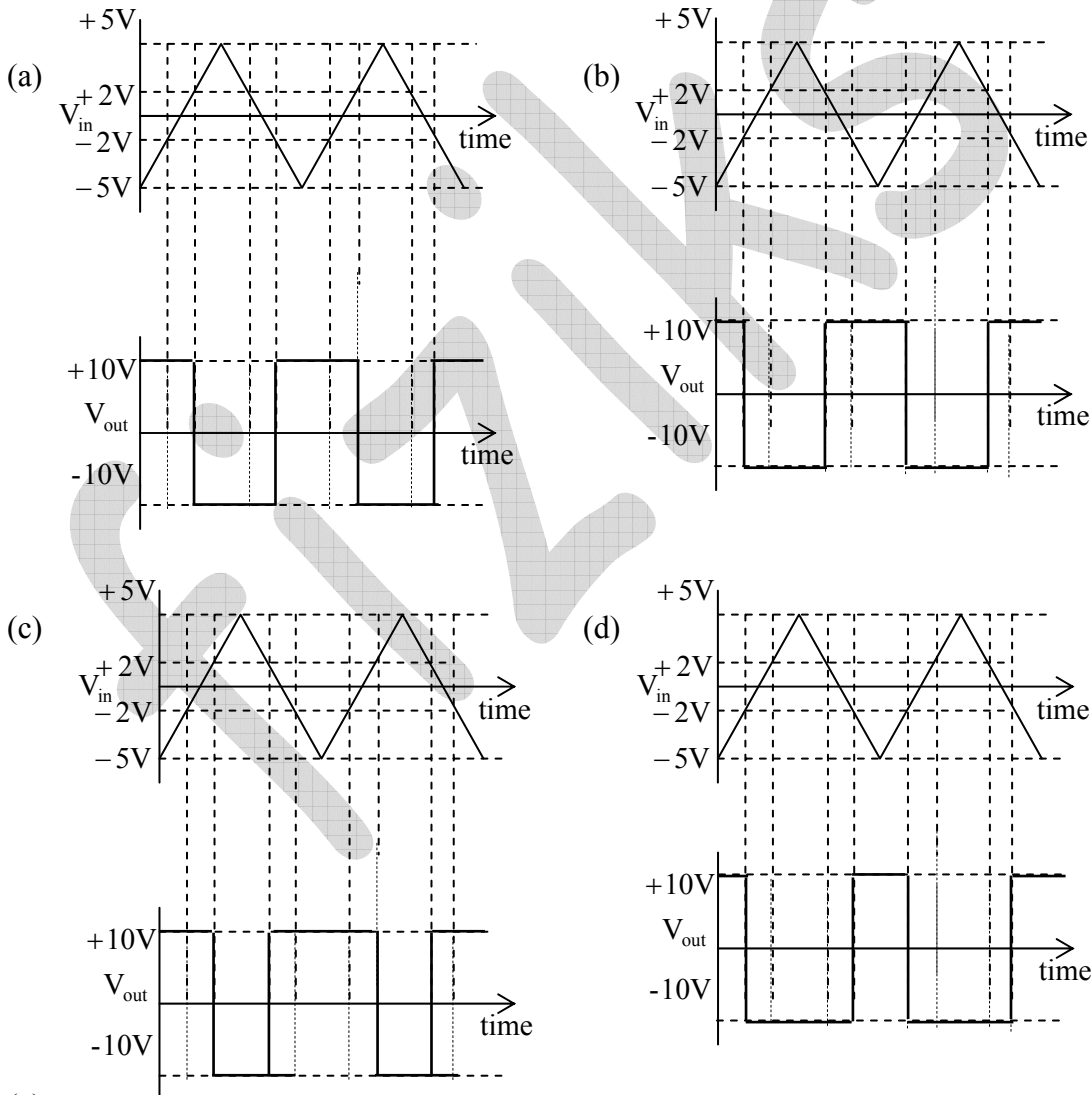
Solution: Current through  $100\Omega$ ,  $I = \frac{5 - 0.7}{100} = 43\text{mA}$

$$I = I_C + 2I_B \approx I_C = 43\text{mA}.$$

Q9. Consider the following circuit



Which of the following correctly represents the output  $V_{out}$  corresponding to the input  $V_{in}$ ?



Ans: (a)

Solution:  $V_{ut} = \left(\frac{1}{1+4}\right) \times 10 = +2V$ ,  $V_{lt} = \left(\frac{1}{1+4}\right) \times -10 = -2V$ .

Q10. The following Boolean expression

$Y = A \cdot \bar{B} \cdot \bar{C} \cdot \bar{D} + \bar{A} \cdot B \cdot \bar{C} \cdot D + \bar{A} \cdot \bar{B} \cdot \bar{C} \cdot D + \bar{A} \cdot \bar{B} \cdot C \cdot D + \bar{A} \cdot B \cdot C \cdot D + A \cdot \bar{B} \cdot \bar{C} \cdot D$  can be simplified to

- (a)  $\bar{A} \cdot \bar{B} \cdot C + A \cdot \bar{D}$  (b)  $\bar{A} \cdot B \cdot \bar{C} + A \cdot \bar{D}$   
 (c)  $A \cdot \bar{B} \cdot \bar{C} + \bar{A} \cdot D$  (d)  $A \cdot \bar{B} \cdot C + \bar{A} \cdot D$

Ans: (c)

	$\bar{C}\bar{D}$	$\bar{C}D$	$CD$	$C\bar{D}$
$\bar{A}\bar{B}$		1	1	
$\bar{A}B$		1	1	
$AB$				
$A\bar{B}$	1	1		

Diagram showing a 4x4 Karnaugh map for variables A, B, C, and D. The columns are labeled  $\bar{C}\bar{D}$ ,  $\bar{C}D$ ,  $CD$ , and  $C\bar{D}$ . The rows are labeled  $\bar{A}\bar{B}$ ,  $\bar{A}B$ ,  $AB$ , and  $A\bar{B}$ . A dashed box encloses the four 1s in the first two columns, with an arrow pointing to the label  $\bar{A}\bar{B}$ . Another dashed box encloses the two 1s in the first row, with an arrow pointing to the label  $\bar{A}D$ .

**GATE-2012**

Q11. If the peak output voltage of a full wave rectifier is 10 V, its d.c. voltage is

- (a) 10.0 V (b) 7.07 V (c) 6.36 V (d) 3.18 V

Ans: (c)

Solution:  $V_{dc} = \frac{2V_m}{\pi} = \frac{2 \times 10}{22/7} = \frac{14 \times 10}{22} = \frac{70}{11} = 6.36V$

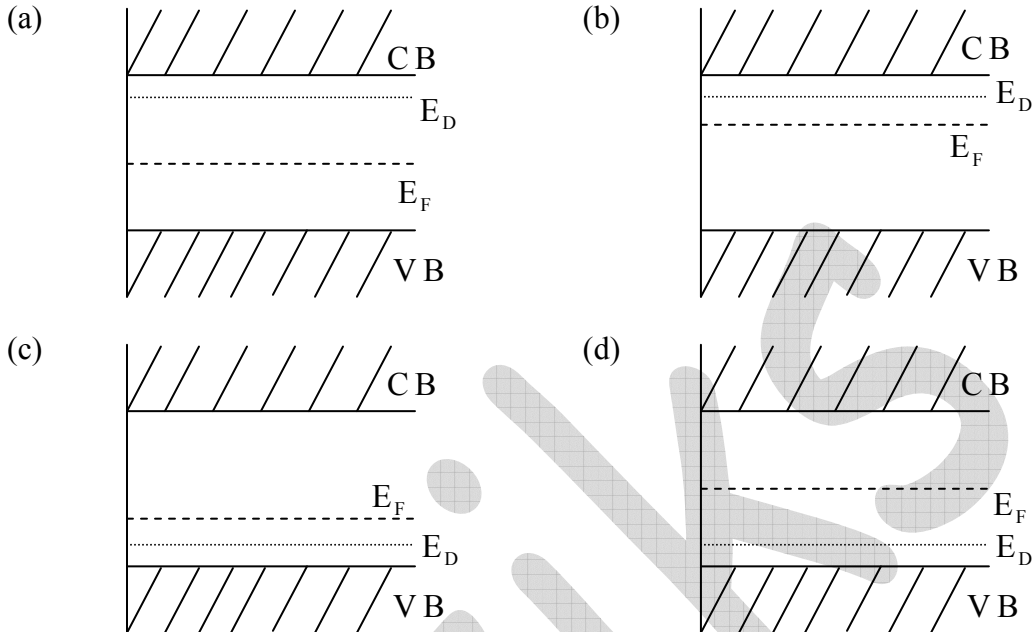
Q12. A Ge semiconductor is doped with acceptor impurity concentration of  $10^{15}$  atoms/cm<sup>3</sup>. For the given hole mobility of 1800 cm<sup>2</sup>/V-s, the resistivity of the material is

- (a) 0.288 Ω cm (b) 0.694 Ω cm (c) 3.472 Ω cm (d) 6.944 Ω cm

Ans: (c)

Solution:  $\rho = \frac{1}{\sigma} = \frac{1}{N_A e u_h} = \frac{1}{10^{15} \times 1.6 \times 10^{-19} \times 1800} = 3.47 \Omega cm$

Q13. Identify the CORRECT energy band diagram for silicon doped with Arsenic. Here CB, VB,  $E_D$  and  $E_F$  are conduction band, valence band, impurity level and Fermi level, respectively.



Ans: (b)

Solution: N-type material (*Si* doped with  $A_S$ ).

Q14. In the following circuit, for the output voltage to be  $V_0 = (-V_1 + V_2 / 2)$  the ratio  $R_1/R_2$  is

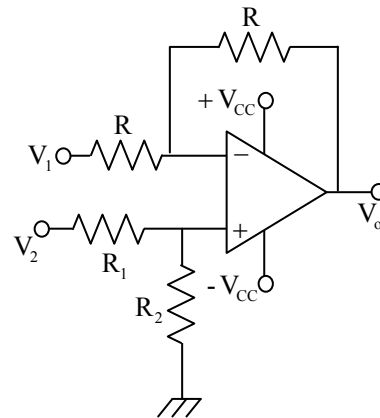
- (a) 1/2
- (b) 1
- (c) 2
- (d) 3

Ans: (d)

Solution: When  $V_2 = 0$ ,  $v_{01} = -V_1$

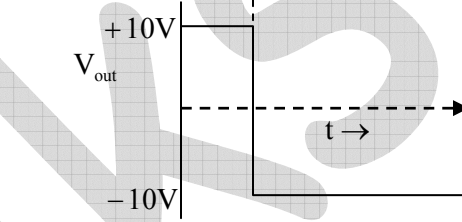
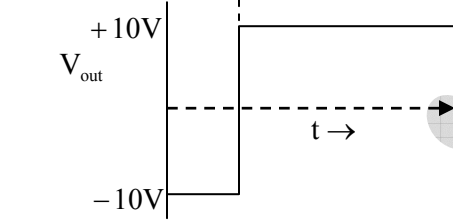
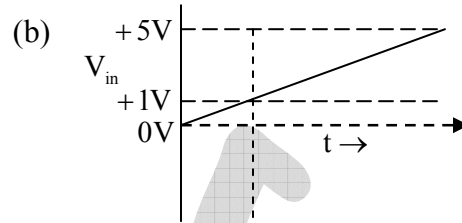
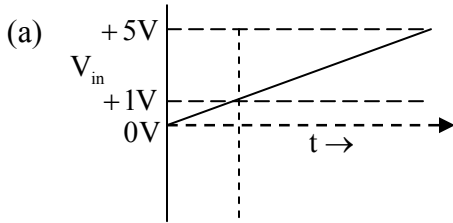
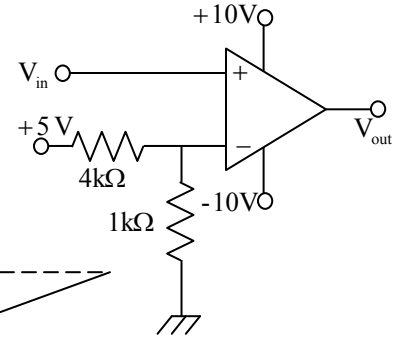
$$\text{when } V_1 = 0, \quad v_{02} = \left(1 + \frac{R}{R}\right) \left(\frac{R_2}{R_1 + R_2}\right) V_2$$

$$\text{Since } V_0 = -V_1 + \frac{V_2}{2} \Rightarrow 2 \cdot \frac{R_2}{R_1 + R_2} = \frac{1}{2} \Rightarrow \frac{R_1}{R_2} = 3$$



Q15. Consider the following OP-AMP circuit.

Which one of the following correctly represents the output  $V_{out}$  corresponding to the input  $V_{in}$ ?

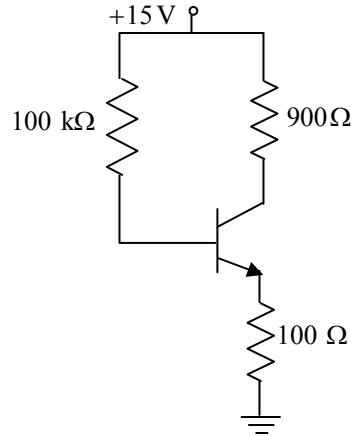


Ans: (a)

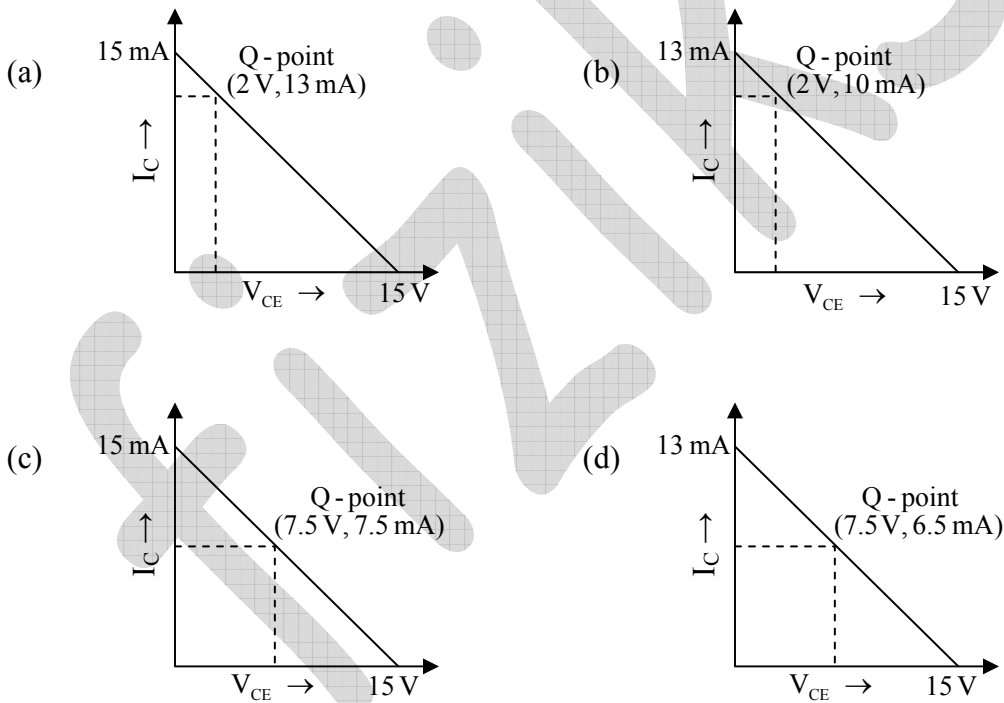
Solution: Voltage at inverting input  $V_2 = \left(\frac{1}{1+4}\right) \times 5 = +1V$ .

When  $v_{in} > +1V$ ,  $v_o = +V_{CC}$  and when  $v_{in} < +1V$ ,  $v_o = -V_{CC}$

Q16. Consider the following circuit in which the current gain  $\beta_{dc}$  of the transistor is 100.



Which one of the following correctly represents the load line (collector current  $I_C$  with respect to collector-emitter voltage  $V_{CE}$ ) and Q-point of this circuit?



Ans: (a)

$$\text{Solution: } I_B = \frac{V_{CC} - V_{BE}}{R_B + R_E} = \frac{15 - 0.7}{100 \times 10^3 + 100} \approx \frac{14.3}{100} \text{ mA.}$$

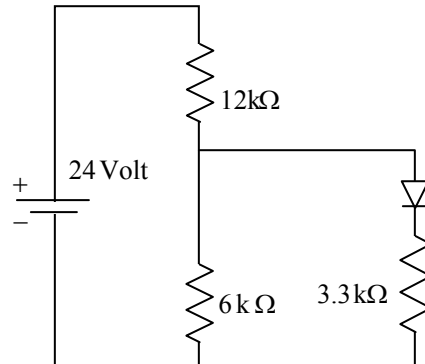
$$I_C \approx \beta I_B \approx 14.3 \text{ mA} \approx 13 \text{ mA}, V_{CE} = V_{CC} - I_C (R_C + R_E) = 15 - (900 + 100) \times 13 \times 10^{-3} = 2 \text{ V.}$$

$$I_{C, \text{Sat}} = \frac{V_{CC}}{R_C + R_E} = \frac{15}{1000} = 15 \text{ mA.}$$



Q17. In the following circuit, the voltage drop across the ideal diode in forward bias condition is 0.7V. The current passing through the diode is

- (a) 0.5 mA
- (b) 1.0 mA
- (c) 1.5 mA
- (d) 2.0 mA



Ans: (b)

Solution: Let current through  $12k\Omega$  is  $I$  and through diode is  $I_D$

$$\text{Then } 0.7 + I_D \times 3.3 = (I - I_D) \times 6 \quad (1)$$

$$\text{and } -24 + I \times 12 + (I - I_D) \times 6 = 0 \quad (2)$$

From (1) and (2)  $I_D \approx 1mA$ .

### GATE-2013

Q18. What should be the clock frequency of a 6-bit A/D converter so that its maximum converted time is  $32\mu s$  ?

- (a) 1 MHz
- (b) 2 MHz
- (c) 0.5 MHz
- (d) 4 MHz

Ans: (c)

Q19. A phosphorous doped silicon semiconductor (doping density:  $10^{17}/cm^3$ ) is heated from  $100^\circ C$  to  $200^\circ C$ . Which one of the following statements is CORRECT?

- (a) Position of Fermi level moves towards conduction band
- (b) Position of dopant level moves towards conduction band
- (c) Position of Fermi level moves towards middle of energy gap
- (d) Position of dopant level moves towards middle of energy gap

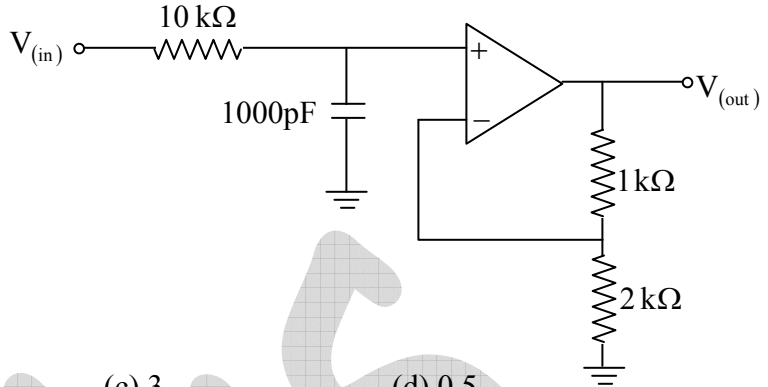
Ans: (c)

**Statement for Linked Answer Questions 20 and 21:**

Consider the following circuit

Q20. For this circuit the frequency above which the gain will decrease by 20 dB per decade is

- (a) 15.9 kHz                      (b) 1.2 kHz  
 (c) 5.6 kHz                        (d) 22.5 kHz



Ans: (a)

Solution:  $f_H = \frac{1}{2\pi RC} = 16 \text{ kHz}$

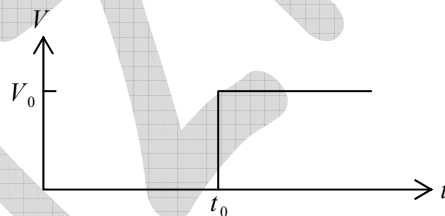
Q21. At 1.2 kHz the closed loop gain is

- (a) 1                                      (b) 1.5                                      (c) 3                                      (d) 0.5

Ans: (b)  $\left| \frac{v_o}{v_{in}} \right| = \frac{\left( 1 + \frac{R_F}{R_1} \right)}{\sqrt{1 + \left( \frac{f}{f_H} \right)^2}} = 1.5$

**GATE-2014**

Q22. The input given to an ideal OP-AMP integrator circuit is



The correct output of the integrator circuit is

- (a) (b) (c) (d)

Ans: (a)

Q23. The minimum number of flip-flops required to construct a mod-75 counter is \_\_\_\_\_

Ans: 7

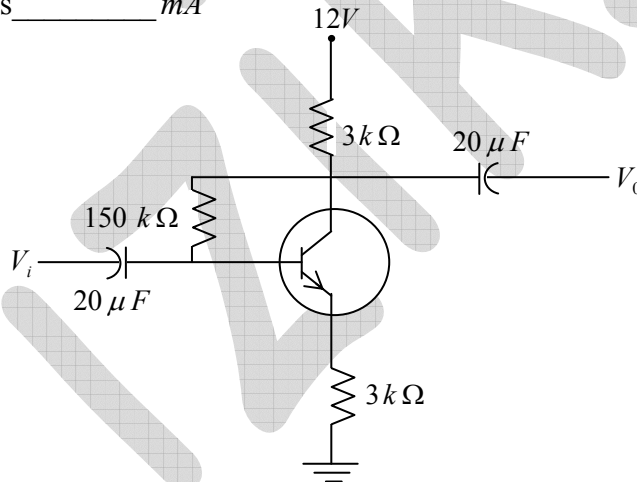
Q24. The donor concentration in a sample of  $n$ -type silicon is increased by a factor of 100. The shift in the position of the Fermi level at 300K, assuming the sample to non degenerate is \_\_\_\_\_  $meV$ . ( $k_B T = 25meV$  at 300K)

Ans: 115.15

Solution:  $E_C - E_F = kT \ln\left(\frac{N_c}{N_d}\right)$  and  $E_C - E'_F = kT \ln\left(\frac{N_c}{100N_d}\right) = kT \ln\left(\frac{N_c}{N_d}\right) - kT \ln(100)$

Thus shift is  $\Delta E = kT \ln(100) = 25 \ln(100) meV = 115.15 meV$

Q25. The current gain of the transistor in the following circuit is  $\beta_{dc} = 100$ . The value of collector current  $I_C$  is \_\_\_\_\_  $mA$



Ans: 1.6

Solution:  $I_B = \frac{V_{CC} - V_{BE}}{R_B + \beta(R_C + R_E)} = \frac{12 - 0}{150 + 100(3 + 3)} = 0.016 mA \Rightarrow I_C = \beta I_B = 1.6 mA$

Q26. In order to measure a maximum of  $1V$  with a resolution of  $1mV$  using a  $n$ -bit  $\frac{A}{D}$  converter working under the principle of ladder network the minimum value of  $n$  is \_\_\_\_\_

Ans: 10

Solution:  $1 \times 10^{-3} = \frac{1}{2^n - 1} \Rightarrow n \approx 10$

Q27. A low pass filter is formed by a resistance  $R$  and a capacitance  $C$ . At the cut-off angular frequency  $\omega_c = \frac{1}{RC}$  the voltage gain and the phase of the output voltage relative to the input voltage respectively are

- (a) 0.71 and  $45^\circ$       (b) 0.71 and  $-45^\circ$       (c) 0.5 and  $-90^\circ$       (d) 0.5 and  $90^\circ$

Ans: (b)

Solution: 
$$\frac{v_0}{v_{in}} = \frac{X_C}{R + X_C} = \frac{1}{\frac{R}{X_C} + 1} = \frac{1}{1 + j\omega CR}$$

At  $\omega = \omega_c = \frac{1}{RC} \Rightarrow \frac{v_0}{v_{in}} = \frac{1}{1 + j} = \frac{1}{\sqrt{2}e^{j45^\circ}} = \frac{1}{\sqrt{2}}e^{-j45^\circ}$

### GATE-2015

Q28. The band gap of an intrinsic semiconductor is  $E_g = 0.72 \text{ eV}$  and  $m_h^* = 6m_n^*$ . At  $300 \text{ K}$ , the Fermi level with respect to the edge of the valence band (in  $\text{eV}$ ) is at \_\_\_\_\_ (upto three decimal places)  $k_B = 1.38 \times 10^{-23} \text{ JK}^{-1}$

Ans.: 0.395

Solution: 
$$E_i = \frac{E_c + E_v}{2} + \frac{3}{4}kT \ln\left(\frac{m_h^*}{m_n^*}\right)$$

$$n_i = N_v e^{-(E_i - E_v)/kT} = \sqrt{N_c N_v} e^{-E_g/2kT} \Rightarrow e^{-(E_i - E_v)/kT} = \sqrt{\frac{N_c}{N_v}} e^{-E_g/2kT} \Rightarrow e^{(E_i - E_v)/kT} = \sqrt{\frac{N_v}{N_c}} e^{E_g/2kT}$$

$$\frac{E_i - E_v}{kT} = \ln\left(\sqrt{\frac{N_v}{N_c}}\right) + \frac{E_g}{2kT} = \ln\left(\frac{m_h^*}{m_n^*}\right)^{\frac{3}{4}} + \frac{E_g}{2kT} \Rightarrow E_i - E_v = \frac{3}{4}kT \ln(6) + \frac{E_g}{2}$$

$$\Rightarrow E_i - E_v = \frac{3}{4} \times 0.026 \times 1.7917 + \frac{0.72}{2} = 0.3949 \text{ eV} \approx 0.395 \text{ eV}$$

Q29. Which one of the following DOES NOT represent an exclusive OR operation for inputs  $A$  and  $B$ ?

- (a)  $(A + B)\overline{AB}$       (b)  $\overline{AB} + \overline{BA}$       (c)  $(A + B)(\overline{A} + \overline{B})$       (d)  $(A + B)AB$

Ans.: (d)

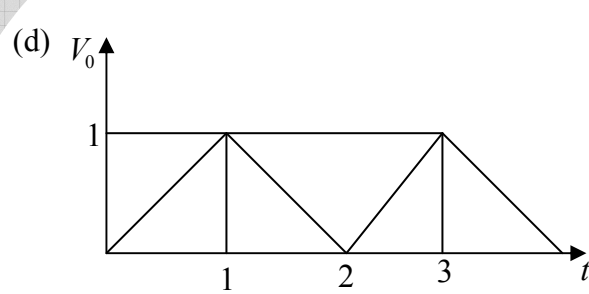
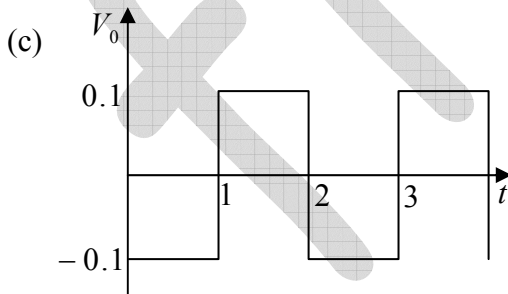
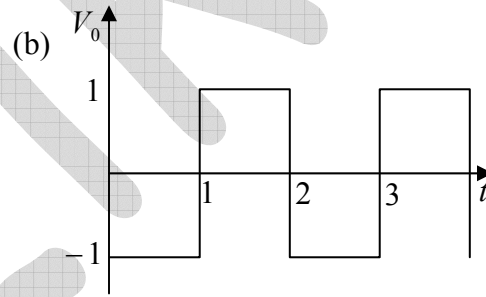
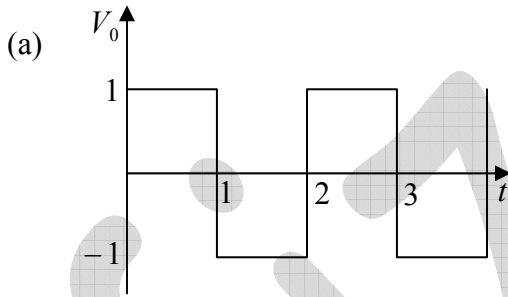
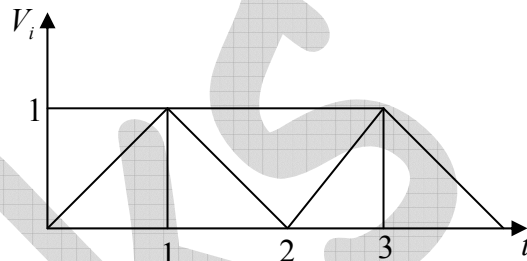
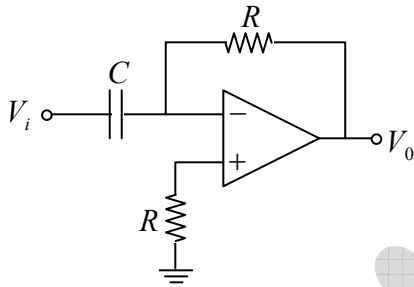
Solution: (a)  $(A+B)\overline{AB} = (A+B)(\overline{A+B}) = \overline{AB} + \overline{AB}$

(b)  $\overline{AB} + \overline{AB}$

(c)  $\overline{AB} + \overline{AB}$

(d)  $(A+B)AB = AB$

Q30. Consider the circuit shown in the figure, where  $RC = 1$ . For an input signal  $V_i$  shown below, choose the correct  $V_0$  from the options:

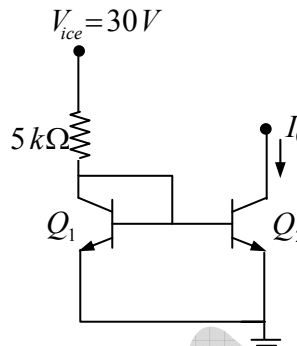


Ans.: (b)

$$\text{Solution: } C \frac{dv_i}{dt} = \frac{0 - v_0}{R} \Rightarrow v_0 = -RC \frac{dv_i}{dt} = -\frac{dv_i}{dt} \Rightarrow v_{in} = -v_0 t$$

$$v_{in} = +t \Rightarrow v_0 = -1V \quad \text{and} \quad v_{in} = -t \Rightarrow v_0 = +1V$$

Q31. In the simple current source shown in the figure,  $Q_1$  and  $Q_2$  are identical transistors with current gain  $\beta = 100$  and  $V_{BE} = 0.7V$

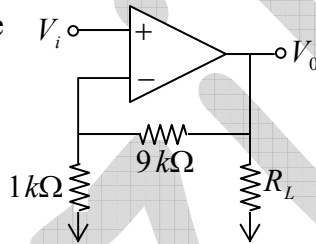


The current  $I_0$  (in mA) is \_\_\_\_\_ (upto two decimal places)

Ans.: 5.86

Solution:  $-V_{CC} + I_C R_C + V_{BE} = 0$ ,  $I_C = \frac{30 - 0.7}{5} = \frac{29.3}{5} = 5.86 \text{ mA}$

Q32. In the given circuit, if the open loop gain  $A = 10^5$  the feedback configurations and the closed loop gain  $A_f$  are



(a) series-shunt,  $A_f = 9$

(b) series-series,  $A_f = 10$

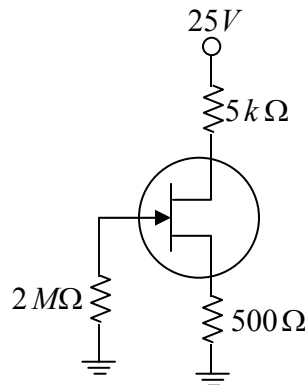
(c) series-shunt,  $A_f = 10$

(d) shunt-shunt,  $A_f = 10$

Ans.: (c)

Solution:  $A_f = \left(1 + \frac{R_F}{R_1}\right) = (1 + 9) = 10$ .

Q33. In the given circuit, the voltage across the source resistor is  $1V$ . The drain voltage (in  $V$ ) is \_\_\_\_\_



Ans.: 15

Solution:  $V_S = I_D R_S \Rightarrow I_D = \frac{1}{500} A \Rightarrow V_D = V_{DD} - I_D R_D = 25 - \frac{1}{500} \times 5000 \Rightarrow V_D = 15V$

## GATE-2016

Q34. The number density of electrons in the conduction band of a semiconductor at a given temperature is  $2 \times 10^{19} \text{ m}^{-3}$ . Upon lightly doping this semiconductor with donor impurities, the number density of conduction electrons at the same temperature becomes  $4 \times 10^{20} \text{ m}^{-3}$ . The ratio of majority to minority charge carrier concentration is \_\_\_\_\_.

Ans : 400

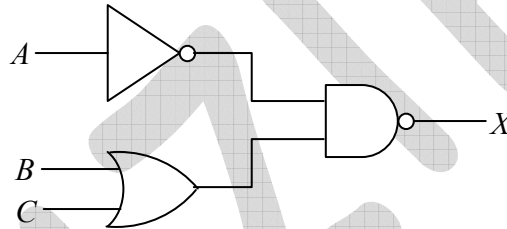
Solution: Intrinsic carrier concentration is  $n_i = 2 \times 10^{19} \text{ m}^{-3}$

Majority carrier concentration is  $n = 4 \times 10^{20} \text{ m}^{-3}$

Minority carrier concentration is  $p = \frac{n_i^2}{n} = \frac{(2 \times 10^{19})^2}{4 \times 10^{20}} = 10^{18} \text{ m}^{-3}$

The ratio of majority to minority charge carrier concentration is  $\frac{n}{p} = \frac{4 \times 10^{20}}{10^{18}} = 400$

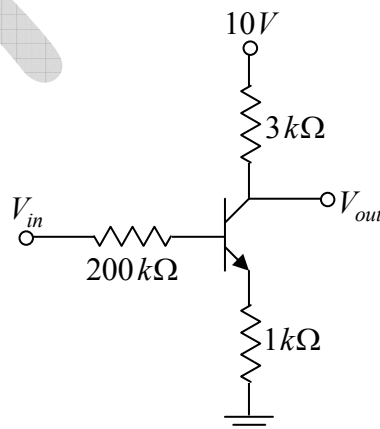
Q35. For the digital circuit given below, the output  $X$  is



- (a)  $\overline{A+B.C}$       (b)  $\overline{A} \cdot (B+C)$       (c)  $\overline{A} \cdot (B+C)$       (d)  $A + \overline{(B.C)}$

Ans.: (b)

Q36. For the transistor shown in the figure, assume  $V_{BE} = 0.7V$  and  $\beta_{dc} = 100$ . If  $V_{in} = 5V, V_{out}$  (in Volts) is \_\_\_\_\_. (Give your answer upto one decimal place)



Ans.: 5.7

Solution:  $I_B = \frac{V_{in} - V_{BE}}{R_B + \beta R_E} = \frac{5 - 0.7}{200 + 100} = \frac{4.3}{300} \text{ mA}$ ,  $I_C = \beta I_B = 1.433 \text{ mA}$

$V_{out} = V_{CC} - I_C R_C \Rightarrow V_{out} = 10 - 1.433 \times 3 = 5.7 \text{ V}$

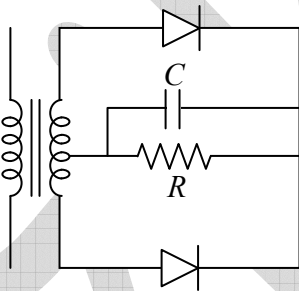
**GATE-2017**

Q37. The best resolution that a 7 bit A/D convertor with 5V full scale can achieve is..... mV . (up to two decimal places)

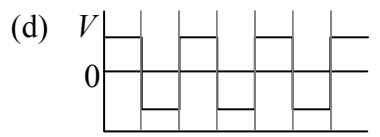
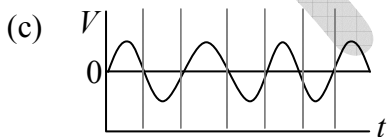
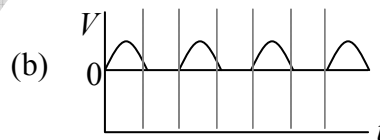
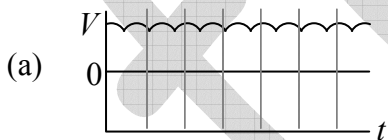
Ans. : 39.37

Solution: Resolution =  $\frac{5}{2^7 - 1} = 39.37 \text{ mV}$

Q38. In the figure given below, the input to the primary of the transformer is a voltage varying sinusoidally with time. The resistor  $R$  is connected to the centre tap of the secondary.



Which one of the following plots represents the voltage across the resistor  $R$  as a function of time?



Ans. : (a)

Solution:

Full wave rectifier with RC filter.

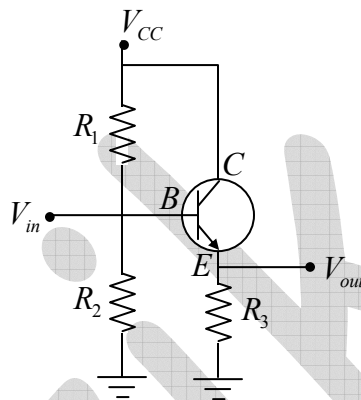


Q39. The minimum number of NAND gates required to construct an OR gate is:

- (a) 2                                      (b) 4                                      (c) 5                                      (d) 3

Ans. : (d)

Q40. For the transistor amplifier circuit shown below with  $R_1 = 10\text{ k}\Omega$ ,  $R_2 = 10\text{ k}\Omega$ ,  $R_3 = 1\text{ k}\Omega$ , and  $\beta = 99$ . Neglecting the emitter diode resistance, the input impedance of the amplifier looking into the base for small ac signal is.....  $\text{k}\Omega$ . (up to two decimal places)

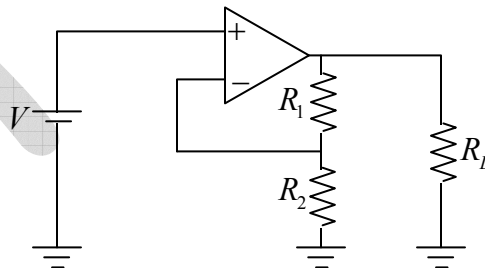


Ans. : 4.75

Solution:  $Z_i = Z_b \parallel R'$  where  $Z_b \approx \beta R_3 = 99\text{ k}\Omega$  and  $R' = R_1 \parallel R_2 = 5\text{ k}\Omega$

$$\Rightarrow Z_i = Z_b \parallel R' = 4.75\text{ k}\Omega$$

Q41. Consider an ideal operational amplifier as shown in the figure below with  $R_1 = 5\text{ k}\Omega$ ,  $R_2 = 1\text{ k}\Omega$ ,  $R_L = 100\text{ k}\Omega$ . For an applied input voltage  $V = 10\text{ mV}$ , the current passing through  $R_2$  is.....  $\mu\text{A}$ . (up to two decimal places)



Ans. : 10.0

$$\text{Solution: } I_2 = \frac{V}{R_2} = \frac{10}{1} = 10\mu\text{A}$$

### GATE – 2018

Q42. The logic expression  $\bar{A}BC + \bar{A}\bar{B}C + AB\bar{C} + A\bar{B}\bar{C}$  can be simplified to

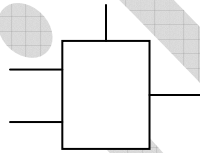
- (a)  $A \text{ XOR } C$       (b)  $A \text{ AND } C$       (c) 0      (d) 1

Ans. : (a)

Solution:  $Y = \bar{A}BC + \bar{A}\bar{B}C + AB\bar{C} + A\bar{B}\bar{C} = \bar{A}C(B + \bar{B}) + AC\bar{(B + \bar{B})}$

$$\Rightarrow Y = \bar{A}C + AC = A \text{ XOR } C$$

Q43. In a 2-to-1 multiplexer as shown below, the output  $X = A_0$  if  $C = 0$  and  $X = A_1$  if  $C = 1$ .



Which one of the following is the correct implementation of this multiplexer?

- (a)
- (b)
- (c)
- (d)

Ans. : (a)

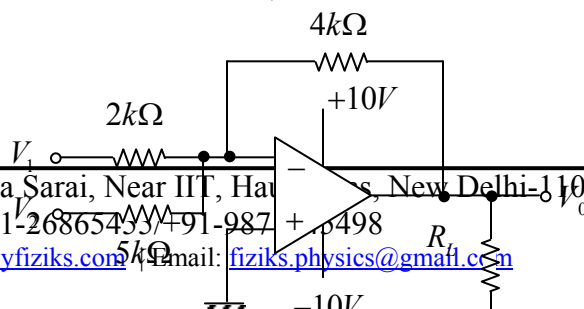
Solution: Check option (a),

$$X = A_0\bar{C} + A_1C$$

$$\text{If } C = 0 \Rightarrow X = A_0$$

$$\text{If } C = 1 \Rightarrow X = A_1$$

Q44. For an operational amplifier (ideal) circuit shown below,



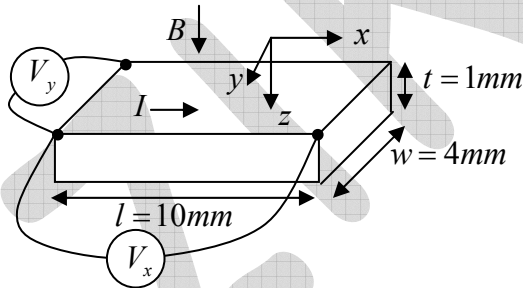
If  $V_1 = 1V$  and  $V_2 = 2V$ , the value of  $V_0$  is \_\_\_\_\_  $V$  (up to one decimal place).

Ans. : -3.6

Solution:  $V_0 = V_{01} + V_{02} = -\frac{4}{2} \times 1V - \frac{4}{5} \times 2V$

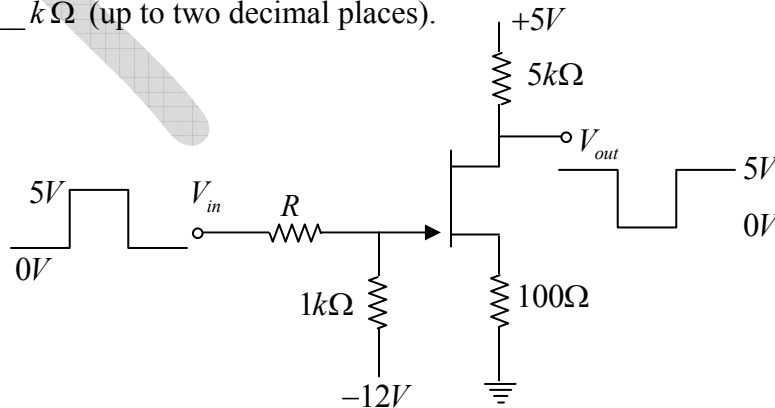
$V_0 = -2 - 1.6 = -3.6V$

Q45. A  $p$ -doped semiconductor slab carries a current  $I = 100mA$  in a magnetic field  $B = 0.2T$  as shown. One measures  $V_y = 0.25mV$  and  $V_x = 2mV$ . The mobility of holes in the semiconductor is \_\_\_\_\_  $m^2V^{-1}s^{-1}$  (up to two decimal places)



Ans. : 1.55

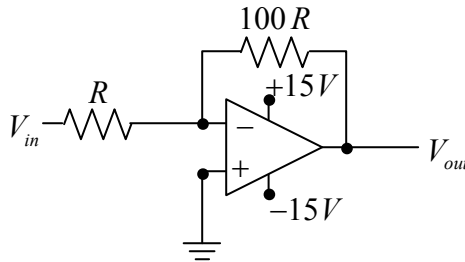
Q46. An  $n$ -channel FET having Gate-Source switch-off voltage  $V_{GS(OFF)} = -2V$  is used to invert a  $0-5V$  square-wave signal as shown. The maximum allowed value of  $R$  would be \_\_\_\_\_  $k\Omega$  (up to two decimal places).



Ans. : 0.70

### GATE-2019

Q47. For the following circuit, what is the magnitude of  $V_{out}$  if  $V_{in} = 1.5V$  ?



- (a)  $0.015V$       (b)  $0.15V$       (c)  $15V$       (d)  $150V$

Ans. : (c)

Solution:  $V_{out} = -\frac{100R}{R} \times 1.5 = -150V \Rightarrow |V_o| = 15V$

Q48. Consider the following Boolean expression:

$$(\bar{A} + \bar{B}) \left[ \overline{A(B+C)} \right] + A(\bar{B} + \bar{C})$$

It can be represented by a single three-input logic gate. Identify the gate

- (a) AND      (b) OR      (c) XOR      (d) NAND

Ans. : (d)

Solution:  $Y = (\bar{A} + \bar{B}) \left[ \overline{A(B+C)} \right] + A(\bar{B} + \bar{C})$

$$Y = (\bar{A} + \bar{B}) \left[ \bar{A} + \overline{(B+C)} \right] + A\bar{B} + A\bar{C}$$

$$= (\bar{A} + \bar{B}) \left[ \bar{A} + \bar{B}\bar{C} \right] + A\bar{B} + A\bar{C}$$

$$= \bar{A} + \bar{A}\bar{B}\bar{C} + \bar{A}\bar{B} + \bar{B}\bar{C} + A\bar{B} + A\bar{C}$$

$$= \bar{A} + \bar{A}\bar{B}\bar{C} + \bar{B}\bar{C} + \bar{A}\bar{B} + A\bar{B} + A\bar{C}$$

$$= \bar{A} + \bar{B}\bar{C} + \bar{B} + A\bar{C} = \bar{A} + \bar{B} + A\bar{C}$$

$$= (\bar{A} + A\bar{C}) + \bar{B} = (A + \overline{\bar{A}\bar{C}}) + \bar{B} = \bar{A} + \bar{C} + \bar{B}$$

$$Y = \overline{ABC}$$

Q49. A 3-bit analog-to-digital converter is designed to digitize analog signals ranging from  $0V$  to  $10V$ . For this converter, the binary output corresponding to an input of  $6V$  is

- (a) 011      (b) 101      (c) 100      (d) 010

Ans. : (c)

Solution:

$$0 \rightarrow (000) \rightarrow 0V$$

$$1 \rightarrow (001) \rightarrow \frac{10}{7} = 1.42V$$

$$2 \rightarrow (010) \rightarrow \frac{20}{7} = 2.8V$$

$$3 \rightarrow (011) \rightarrow \frac{30}{7} = 4.28V$$

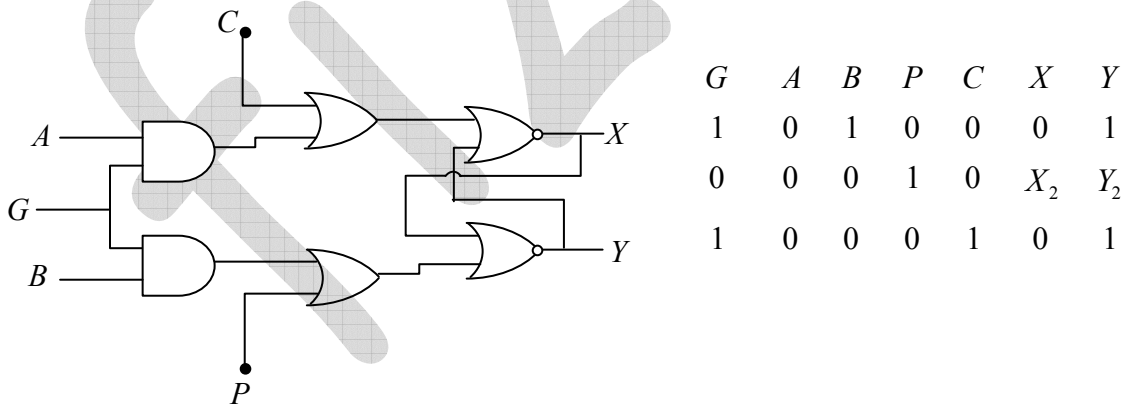
$$4 \rightarrow (100) \rightarrow \frac{40}{7} = 5.71V$$

$$5 \rightarrow (101) \rightarrow \frac{50}{7} = 7.14V$$

$$6 \rightarrow (110) \rightarrow \frac{60}{7} = 8.57V$$

$$7 \rightarrow (111) \rightarrow \frac{70}{7} = 10V$$

Q50. For the following circuit, the correct logic values for the entries  $X_2$  and  $Y_2$  in the truth table are



(a) 1 and 0

(b) 0 and 0

(c) 0 and 1

(d) 1 and 1

Ans. : (a)